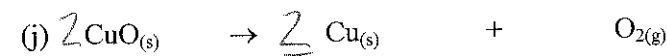
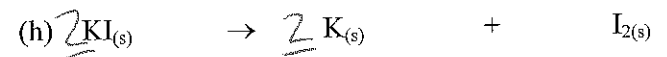
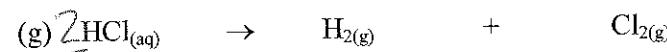
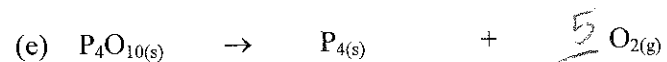
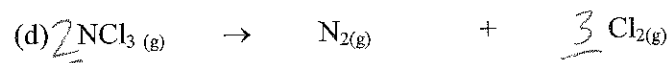
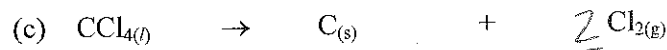
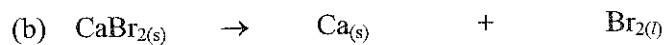
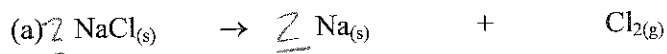



Balancing Decomposition Reaction Equations

2. Balance each equation for a decomposition reaction.



4. Write a balanced chemical equation to represent each reaction described below.

(a) Rubidium oxide decomposes into its elements.



(b) Calcium chloride decomposes into its elements.

